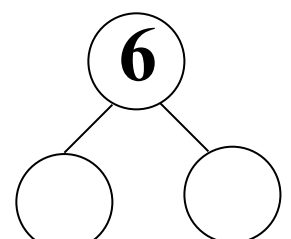
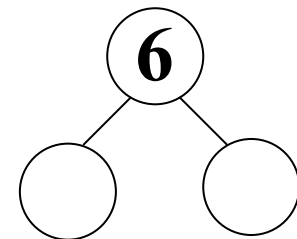
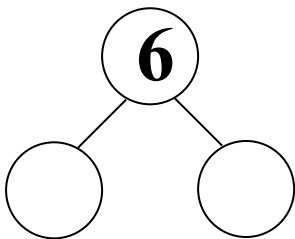
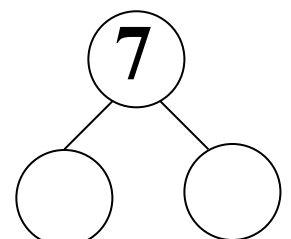
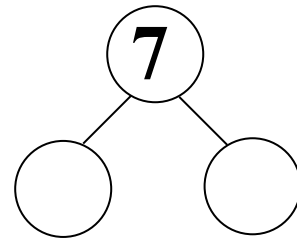
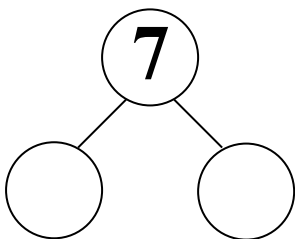
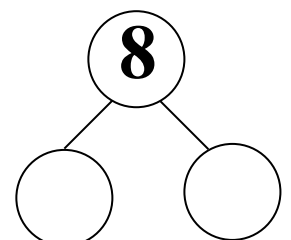
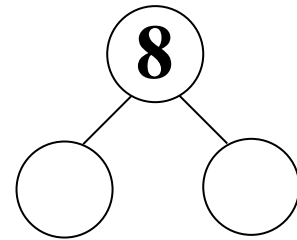
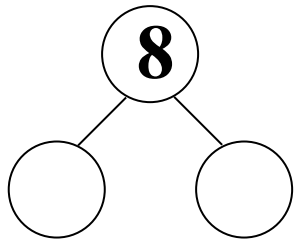
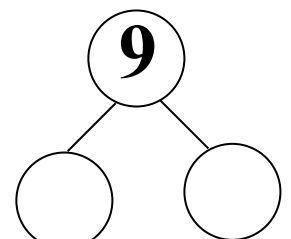
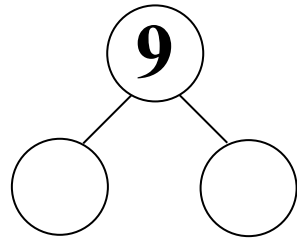
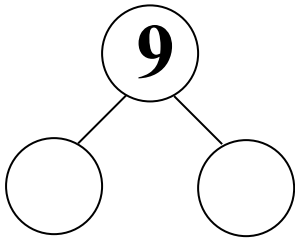
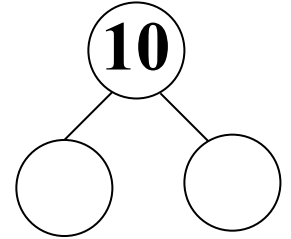
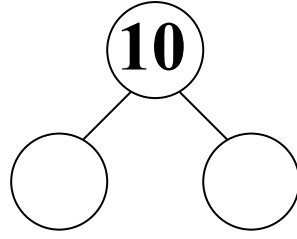
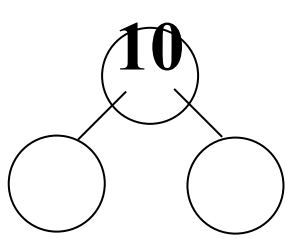
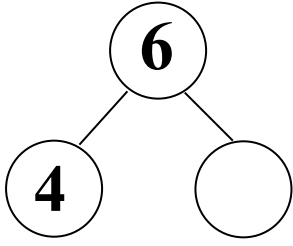


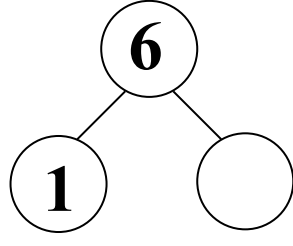
حل الاعداد التاليه :



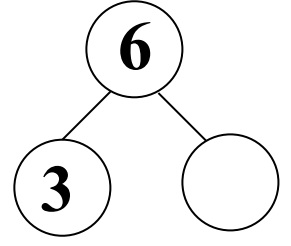
1- اكمل التالي :



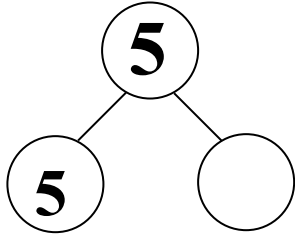
$$4 + \underline{\quad} = 6$$



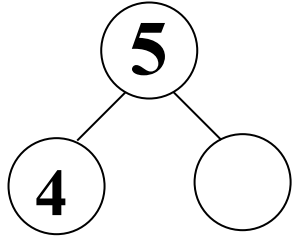
$$1 + \underline{\quad} = 6$$



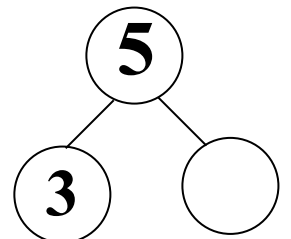
$$3 + \underline{\quad} = 6$$



$$5 + \underline{\quad} = 5$$



$$4 + \underline{\quad} = 5$$



$$3 + \underline{\quad} = 5$$

2- اجمع :-

$$5 + 5 = \underline{\quad}$$

$$4 + 2 = \underline{\quad}$$

$$6 + 4 = \underline{\quad}$$

$$9 + 1 = \underline{\quad}$$

$$6 + 0 = \underline{\quad}$$

$$4 + 5 = \underline{\quad}$$

$$5 + 0 = \underline{\quad}$$

$$6 + 3 = \underline{\quad}$$

$$3 + 2 = \underline{\quad}$$

$$4 + 4 = \underline{\quad}$$

$$4 + 3 = \underline{\quad}$$

$$5 + 3 = \underline{\quad}$$

1- اكتب إشارة : $>$ $<$ $=$

9 _____ 13	15 _____ 5
20 _____ 7	3 _____ 14
18 _____ 8	13 _____ 20
19 _____ 7	15 _____ 15



2- ضع دائرة حول الاعداد الزوجيه :



2	6	7	9	12	20	15
13	16	10	4	8	14	18

3- ضع خطاً تحت الاعداد الفرديه :

2	19	5	9	6	<u>3</u>
16	15	11	14	7	10
8	17	20	1	13	4

حل المسائل الكلاميه التاليه :

مع  3 بالونات 

مع  4 بالونات 

كم بالونا  معهما ؟
_____ + _____ = _____

مع  5 ملبسات 

مع  4 ملبسات 

كم ملبسه  معهما ؟
_____ + _____ = _____

يوجد 6 زهرات 

يوجد 4 زهرات 

كم زهره  يوجد ؟

_____ + _____ = _____