

أكتب العدد الناقص :

$9 + \underline{\quad} = 11$

$10 + \underline{\quad} = 20$

$12 + \underline{\quad} = 14$

$12 + \underline{\quad} = 15$

$6 + \underline{\quad} = 10$

$10 + \underline{\quad} = 13$

$8 + \underline{\quad} = 12$

$6 + \underline{\quad} = 12$

$9 + \underline{\quad} = 10$

$3 + \underline{\quad} = 4$

$8 + \underline{\quad} = 16$

$8 + \underline{\quad} = 11$

$4 + \underline{\quad} = 10$

$7 + \underline{\quad} = 8$

$3 + \underline{\quad} = 7$

$12 + \underline{\quad} = 12$

$5 + \underline{\quad} = 9$

$7 + \underline{\quad} = 10$

$7 + \underline{\quad} = 9$

$7 + \underline{\quad} = 11$

إطرح :

$5 - 2 = \underline{\quad}$

$7 - 6 = \underline{\quad}$

$10 - 7 = \underline{\quad}$

$5 - 1 = \underline{\quad}$

$6 - 3 = \underline{\quad}$

$8 - 5 = \underline{\quad}$

$10 - 8 = \underline{\quad}$

$7 - 4 = \underline{\quad}$

$10 - 6 = \underline{\quad}$

$3 - 1 = \underline{\quad}$

$9 - 3 = \underline{\quad}$

$4 - 2 = \underline{\quad}$

$7 - 2 = \underline{\quad}$

$10 - 0 = \underline{\quad}$

$8 - 4 = \underline{\quad}$

$9 - 9 = \underline{\quad}$

$6 - 2 = \underline{\quad}$

$3 - 0 = \underline{\quad}$

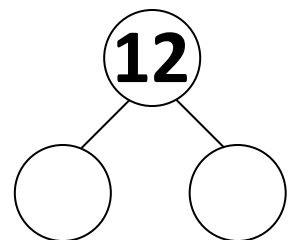
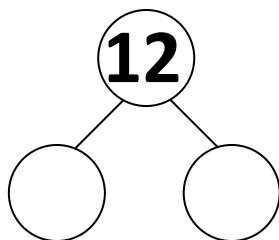
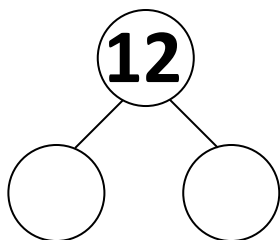
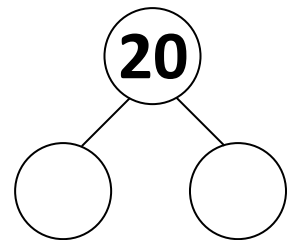
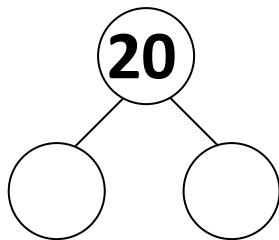
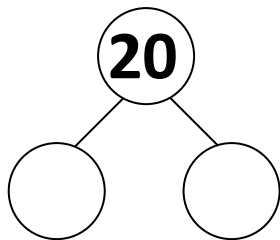
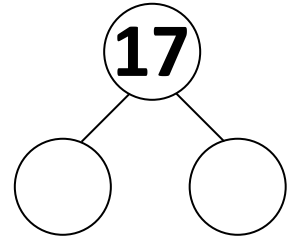
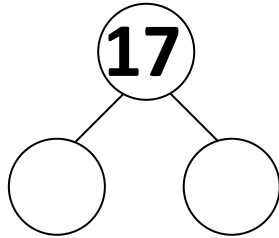
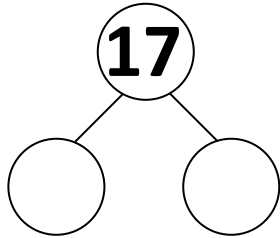
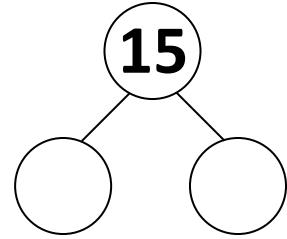
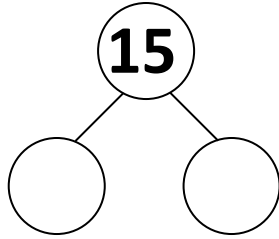
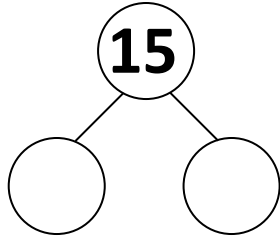
$9 - 5 = \underline{\quad}$

$2 - 1 = \underline{\quad}$

$10 - 3 = \underline{\quad}$

$8 - 2 = \underline{\quad}$

حلل الأعداد التالية :



ضع علامة التباين الملائمة : $=$ $>$ $<$

$50 \underline{\quad} 50$

$30 \underline{\quad} 20$

$16 \underline{\quad} 60$

$10 \underline{\quad} 40$

$7 \underline{\quad} 17$

$60 \underline{\quad} 60$

$80 \underline{\quad} 8$

$9 \underline{\quad} 6$

$15 \underline{\quad} 20$

$5 \underline{\quad} 2$

$17 \underline{\quad} 18$

$70 \underline{\quad} 20$

$12 \underline{\quad} 11$

$100 \underline{\quad} 10$

$20 \underline{\quad} 20$

$19 \underline{\quad} 20$

$50 \underline{\quad} 70$

$15 \underline{\quad} 5$

اجمع يا بطل

$12 + 3 = \underline{\quad}$

$6 + 3 = \underline{\quad}$

$15 + 3 = \underline{\quad}$

$8 + 2 = \underline{\quad}$

$14 + 1 = \underline{\quad}$

$7 + 5 = \underline{\quad}$

$10 + 5 = \underline{\quad}$

$6 + 7 = \underline{\quad}$

$9 + 1 = \underline{\quad}$

$8 + 7 = \underline{\quad}$

$7 + 7 = \underline{\quad}$

$9 + 9 = \underline{\quad}$

$6 + 6 = \underline{\quad}$

$8 + 4 = \underline{\quad}$

$10 + 3 = \underline{\quad}$

$5 + 3 = \underline{\quad}$

$10 + 10 = \underline{\quad}$

$4 + 3 = \underline{\quad}$

$9 + 5 = \underline{\quad}$

$1 + 1 = \underline{\quad}$

$8 + 5 = \underline{\quad}$

$7 + 2 = \underline{\quad}$

$7 + 4 = \underline{\quad}$

$10 + 9 = \underline{\quad}$

حلل الاعداد التالية :

$$\underline{\quad} + \underline{\quad} = 10$$

$$\underline{\quad} + \underline{\quad} = 12$$

$$\underline{\quad} + \underline{\quad} = 7$$

$$\underline{\quad} + \underline{\quad} = 8$$

$$\underline{\quad} + \underline{\quad} = 6$$

$$\underline{\quad} + \underline{\quad} = 13$$

$$\underline{\quad} + \underline{\quad} = 9$$

$$\underline{\quad} + \underline{\quad} = 18$$

$$\underline{\quad} + \underline{\quad} = 15$$

$$\underline{\quad} + \underline{\quad} = 14$$

$$\underline{\quad} + \underline{\quad} = 19$$

$$\underline{\quad} + \underline{\quad} = 1$$

$$\underline{\quad} + \underline{\quad} = 16$$

$$\underline{\quad} + \underline{\quad} = 2$$

$$\underline{\quad} + \underline{\quad} = 5$$

$$\underline{\quad} + \underline{\quad} = 4$$

$$\underline{\quad} + \underline{\quad} = 3$$

$$\underline{\quad} + \underline{\quad} = 17$$

$$\underline{\quad} + \underline{\quad} = 11$$

$$\underline{\quad} + \underline{\quad} = 20$$

اكتب الاعداد الزوجية حتى 30 :

_____	_____	_____
_____	_____	_____
_____	_____	_____
_____	_____	_____
_____	_____	_____

اكتب الاعداد الفردية حتى 31 :

_____	_____	_____
_____	_____	_____
_____	_____	_____
_____	_____	_____
_____	_____	_____

اكمل المتواليات بقفزات ثابتة :

19 ___ ___ 22 ___ ___ 25 ___ ___ ___ 29 ___

2 4 ___ ___ 10 ___ 14 ___ ___ ___ 22

1 3 5 ___ ___ ___ 13 ___ ___ 19 ___

10 20 ___ ___ 50 ___ ___ ___ 90 ___

10 11 ___ ___ 14 ___ ___ ___ 18 ___

1 2 3 ___ ___ 6 ___ ___ ___ 10

19 18 ___ 16 ___ ___ 13 ___ ___

10 9 8 ___ ___ 5 ___ ___ 2 ___ 0

20 ___ ___ 23 ___ ___ 26 ___ ___ ___ 30

13 14 ___ ___ 17 ___ ___ 20 ___